

The Abacus Club

 Toucañ Series



Book 3

Find pairs of balloons which add up to 8. Draw strings that tie each of these pairs of balloons together.



Date :

1	2	3	4	5	6	7	8	9	10	11	12
7	45	44	37	17	42	38	43	13	28	39	47
46	6	-12	15	22	8	-4	8	33	22	15	6
5	7	18	6	18	5	17	15	8	12	7	7



Score
Time

Date :

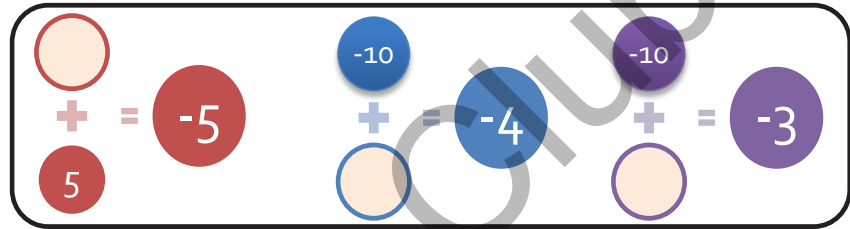
1	2	3	4	5	6	7	8	9	10	11	12
48	38	35	36	45	36	46	33	27	38	12	16
-14	-24	18	36	20	48	8	38	27	25	48	37
17	38	13	12	-12	12	17	-11	14	15	17	16



Score
Time



Remember to always take away the 'ten' beads first, then add the complement beads.



Date :

1	2	3	4	5	6	7	8	9	10	11	12
10	7	8	20	16	23	11	16	35	14	16	77
-3	5	5	-3	-4	7	9	6	26	18	16	3
8	-3	-3	-3	-3	-3	-3	-3	-3	-3	-3	-3



Score :

Date :

1	2	3	4	5	6	7	8	9	10	11	12
8	13	21	13	35	18	33	14	21	14	16	17
5	-4	-4	12	-4	3	-4	18	23	6	6	13
-4	-4	7	-4	-4	-4	-5	-4	-4	-4	-4	-4



Score :

Date :

1	2	3	4	5	6	7	8	9	10	11	12
13	12	8	27	17	34	23	24	37	19	36	47
20	31	14	15	15	38	39	-7	27	15	26	15
-7	-7	-7	-7	-7	-7	-7	6	-7	-7	-7	-7



Score :

Date :

1	2	3	4	5	6	7	8	9	10	11	12
16	35	36	72	46	82	55	48	38	51	41	34
26	41	38	-16	25	-26	6	24	34	14	28	48
-7	-7	-6	5	-6	13	-6	-6	-7	-6	-7	-7



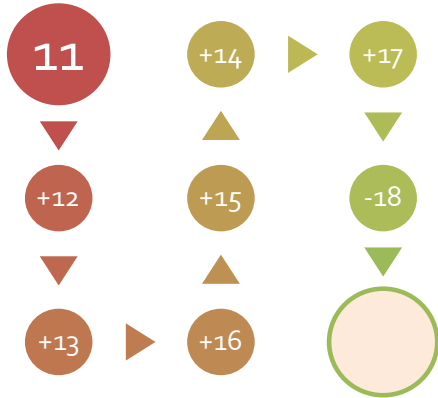
Score :



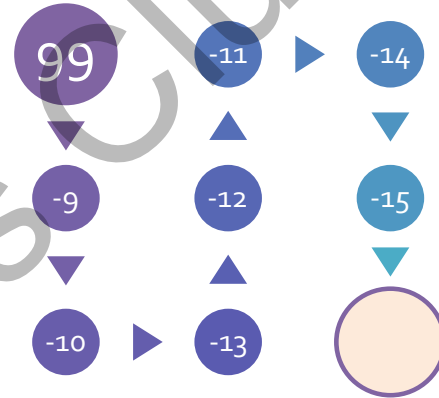
A challenge for you!

Add up threes ($3 + 3 + 3 + 3 \dots$) on your abacus for 1 minute. Write today's date and draw a star on the 'Reach for the Stars' chart at the end of the book. What number did you add up to? Are you reaching for the stars?

Classroom Activities



Can you add the numbers up following the arrow signs?



Calculate the sum in the box you have chosen without using the abacus . You can place a nought or a cross in the box when you get the right answer. You receive a point when you get 3 noughts or crosses in a row.

Noughts (o) and Crosses (x)

$17+20=$	$1 \times 3=$	$3 \times 3=$	$50+5=$
$2 \times 2=$	$18-6=$	$3 \times 5=$	$2 \times 9=$
$14+4=$	$23+4=$	$2 \times 4=$	$31+8=$
$15+20=$	$61+11=$	$21+23=$	$8 \times 2=$